

แบบฝึกคำนวณหาความต้านทานรวม

ชื่อ.....รหัส.....หมู่เรียน.....

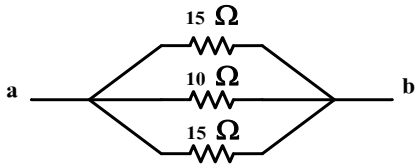
คำสั่ง จงคำนวณหาความต้านทานรวม R_{ab} จากรูปวงจรดังต่อไปนี้

1.



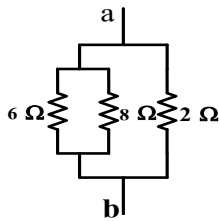
.....

2.



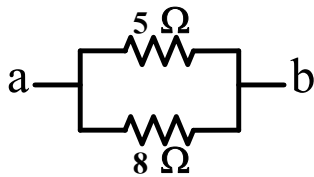
.....

3.



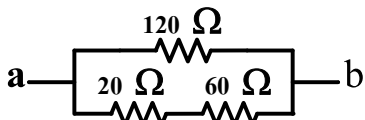
.....

4.



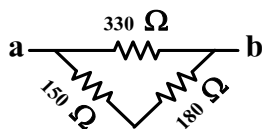
.....

5.



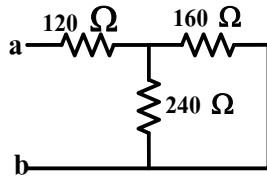
.....

6.



.....

7.



.....

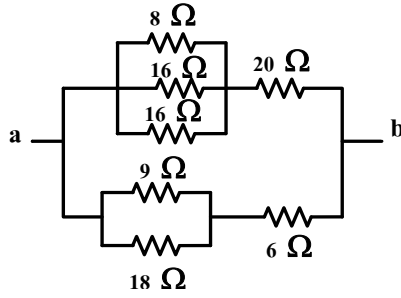
.....

.....

.....

.....

8.



.....

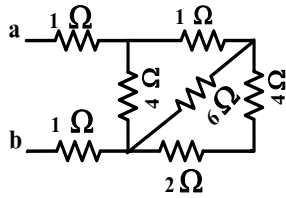
.....

.....

.....

.....

9.



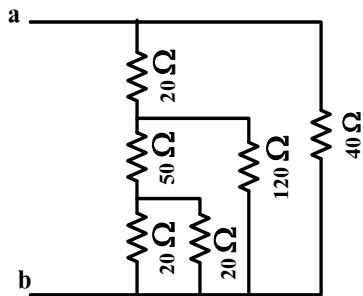
.....

.....

.....

.....

10.



.....

.....

.....

.....